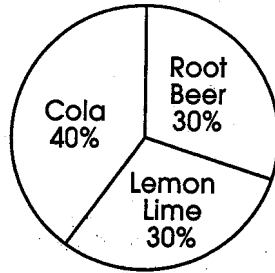


Circle Graphs

Name _____

Circle graphs are best to use when a total amount has been divided into parts. Each part illustrates a ratio of the whole.

Example:




Favorite Soda Flavors

Root Beer	30%
Lemon Lime	30%
Cola	40%

Use the following information to complete the circle graphs.


1. Birthplaces of the first ten U.S. presidents:

Virginia	60%
Massachusetts	20%
New York	10%
South Carolina	10%



2. Trash collected on Ecology Day:

paper	50%
aluminum cans	15%
plastic	15%
rubber	10%
glass	10%



3. Pizza preferences:

cheese	30%
cheese/pepperoni	20%
cheese/mushroom	10%
deluxe	40%

